



Maggie wants to paint her jewelry box blue.
How much paint will she need?



Nicholas has a pepper shaker that is in the
shape of a cylinder. How much pepper will fit in
the shaker?



Rachel builds a pool in her backyard. How much water will fit in the pool?



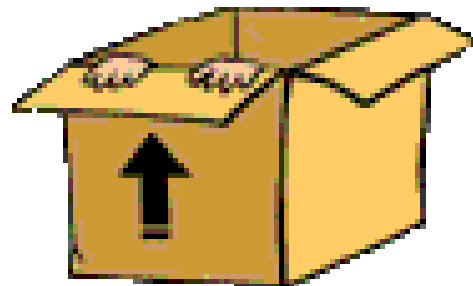
How many square feet of cardboard will Jessica need to make a rectangular prism?



How much gift wrap is needed to cover a box?




A package is shaped like a cube. How much space is available to pack inside the box?



How much water is needed to fill a fish tank?



Kim needs to paint the top and sides of a rectangular prism. How much paint will she need?



Brittany is going to cover the label of a Pringles chip can and decorate it for Easter. How much paper will she need?



A cereal company decided to make a new box for a promotion they are doing. How much cereal will fit in the box?

